



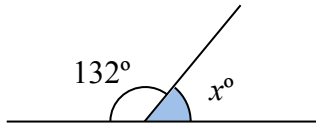
ANGLE

ANGLES WHICH FORM A STRAIGHT LINE

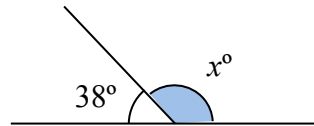
NO PROTRACTOR

Ref: G421. **1F1**

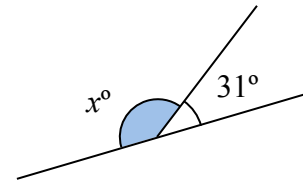
A1 Find the value x



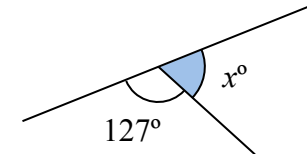
A2 Find the value x



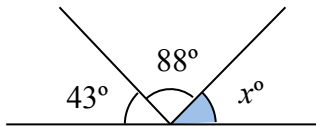
A3 Find the value x



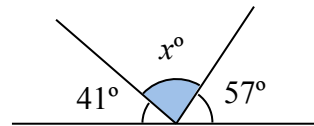
A4 Find the value x



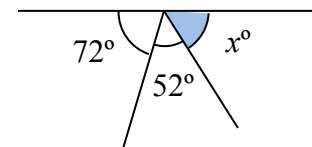
B1 Find the value x



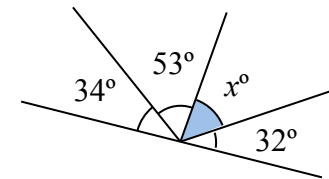
B2 Find the value x



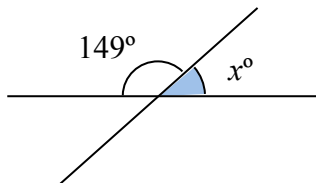
B3 Find the value x



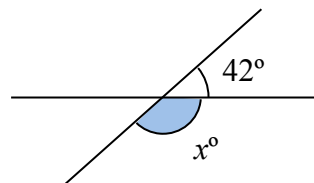
B4 Find the value x



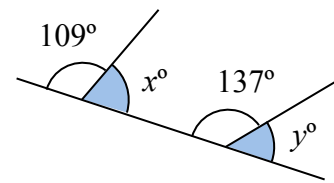
C1 Find the value x



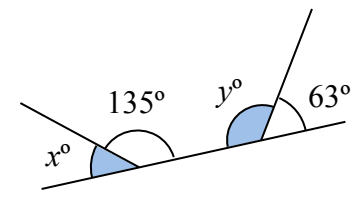
C2 Find the value x



C3 Find the values of x and y



C4 Find the values of x and y





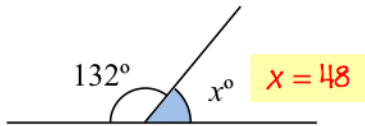
ANGLE

ANGLES WHICH FORM A STRAIGHT LINE

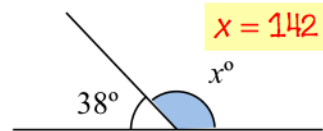
NO PROTRACTOR

Ref: G421. **1F1**

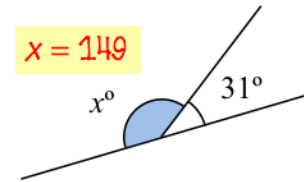
A1 Find the value x



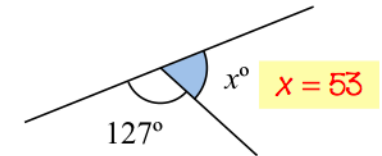
A2 Find the value x



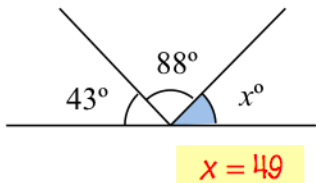
A3 Find the value x



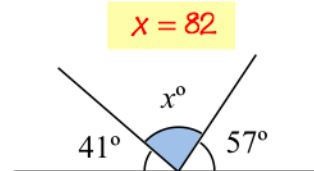
A4 Find the value x



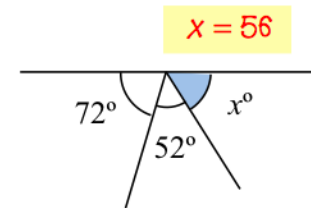
B1 Find the value x



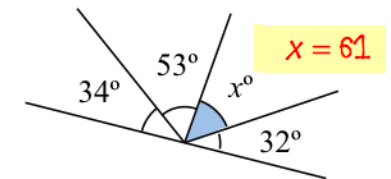
B2 Find the value x



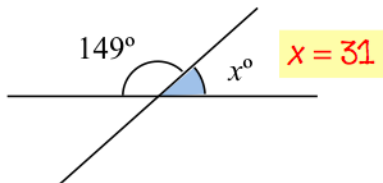
B3 Find the value x



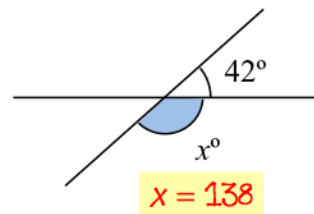
B4 Find the value x



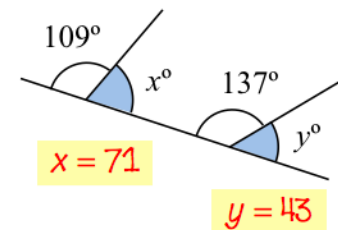
C1 Find the value x



C2 Find the value x



C3 Find the values of x and y



C4 Find the values of x and y

