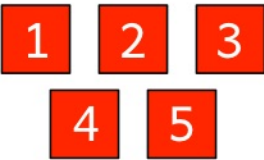


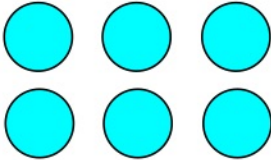




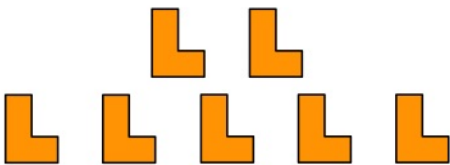


# COUNTING TO TEN

REF: G111.1F1

For each question, write the answer in **numerals** and in **words**


<p>A1 How many shapes are there?</p>  <p>5 f i v e</p>	<p>A2 How many shapes are there?</p>  <p>_____</p>	<p>A3 How many shapes are there?</p>  <p>_____</p>
<p>B1 How many shapes are there?</p>  <p>_____</p>	<p>B2 How many shapes are there?</p>  <p>_____</p>	<p>B3 How many shapes are there?</p>  <p>_____</p>
<p>C1 How many shapes are there?</p>  <p>_____</p>	<p>C2 How many shapes are there?</p>  <p>_____</p>	<p>C3 How many shapes are there?</p>  <p>_____</p>

# COUNTING TO TEN

REF: G11.1F1


For each question, write the answer in **numerals** and in **words**

A1 How many shapes are there?



5 f i v e

A2 How many shapes are there?



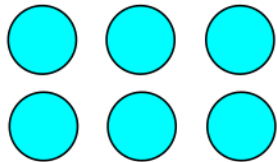
3 t h r e e

A3 How many shapes are there?




4 f o u r

B1 How many shapes are there?




6 s i x

B2 How many shapes are there?



2 t w o

B3 How many shapes are there?




8 e i g h t

C1 How many shapes are there?



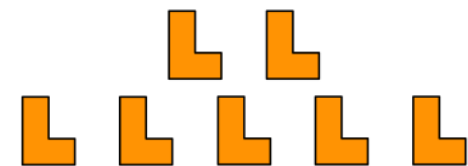
1 o n e

C2 How many shapes are there?



9 n i n e

C3 How many shapes are there?



7 s e v e n