


COUNTING TO TEN

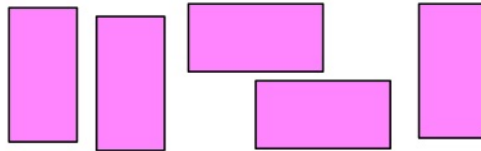
For each question, write the answer in **numerals** and in **words**

A1 How many shapes are there?



○ _ _ _ _

A2 How many shapes are there?




○ _ _ _ _

A3 How many shapes are there?




○ _ _ _ _

B1 How many shapes are there?



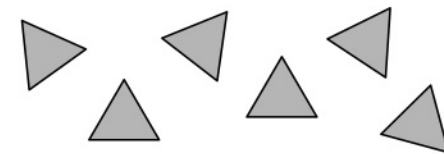
○ _ _ _

B2 How many shapes are there?



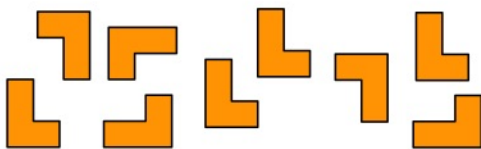
○ _ _ _ _

B3 How many shapes are there?



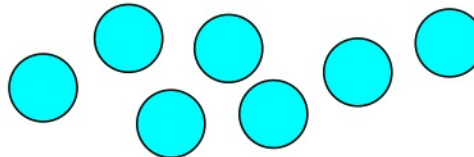
○ _ _ _

C1 How many shapes are there?



○ _ _ _ _

C2 How many shapes are there?



○ _ _ _ _

C3 How many shapes are there?




○ _ _ _

COUNTING TO TEN

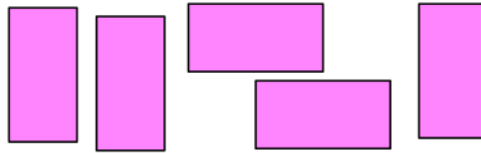
For each question, write the answer in **numerals** and in **words**

A1 How many shapes are there?



3 t h r e e

A2 How many shapes are there?




5 f i v e

A3 How many shapes are there?



4 f o u r

B1 How many shapes are there?



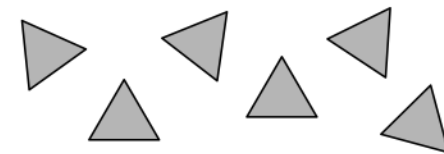
6 s i x

B2 How many shapes are there?




8 e i g h t

B3 How many shapes are there?



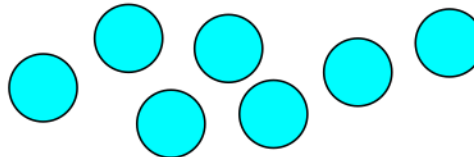
6 s i x

C1 How many shapes are there?



9 n i n e

C2 How many shapes are there?



7 s e v e n

C3 How many shapes are there?



1 o n e