











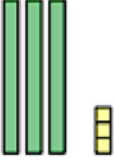
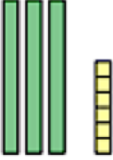
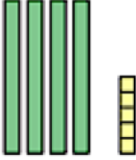
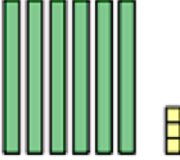




TWO-DIGIT NUMBERS

DIENES BLOCKS 1

Ref: G113. **1F2**













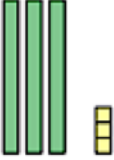
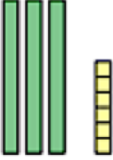
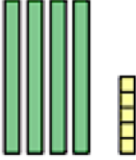
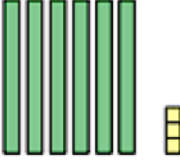
A1 What number is shown by the Dienes Blocks? 	A2 What number is shown by the Dienes Blocks? 	A3 What number is shown by the Dienes Blocks? 	A4 What number is shown by the Dienes Blocks? 
B1 What number is shown by the Dienes Blocks? 	B2 What number is shown by the Dienes Blocks? 	B3 What number is shown by the Dienes Blocks? 	B4 What number is shown by the Dienes Blocks? 
C1 What number is shown by the Dienes Blocks? 	C2 What number is shown by the Dienes Blocks? 	C3 What number is shown by the Dienes Blocks? 	C4 What number is shown by the Dienes Blocks? 
D1 What number is shown by the Dienes Blocks? 	D2 What number is shown by the Dienes Blocks? 	D3 What number is shown by the Dienes Blocks? 	D4 What number is shown by the Dienes Blocks? 



TWO-DIGIT NUMBERS

DIENES BLOCKS 1

Ref: G113. **1F2**

<p>A1 What number is shown by the Dienes Blocks?</p>  <p>1</p>	<p>A2 What number is shown by the Dienes Blocks?</p>  <p>2</p>	<p>A3 What number is shown by the Dienes Blocks?</p>  <p>4</p>	<p>A4 What number is shown by the Dienes Blocks?</p>  <p>8</p>
<p>B1 What number is shown by the Dienes Blocks?</p>  <p>10</p>	<p>B2 What number is shown by the Dienes Blocks?</p>  <p>20</p>	<p>B3 What number is shown by the Dienes Blocks?</p>  <p>50</p>	<p>B4 What number is shown by the Dienes Blocks?</p>  <p>30</p>
<p>C1 What number is shown by the Dienes Blocks?</p>  <p>11</p>	<p>C2 What number is shown by the Dienes Blocks?</p>  <p>12</p>	<p>C3 What number is shown by the Dienes Blocks?</p>  <p>21</p>	<p>C4 What number is shown by the Dienes Blocks?</p>  <p>22</p>
<p>D1 What number is shown by the Dienes Blocks?</p>  <p>33</p>	<p>D2 What number is shown by the Dienes Blocks?</p>  <p>36</p>	<p>D3 What number is shown by the Dienes Blocks?</p>  <p>45</p>	<p>D4 What number is shown by the Dienes Blocks?</p>  <p>63</p>