


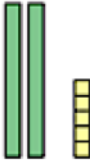
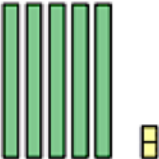
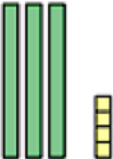




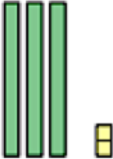

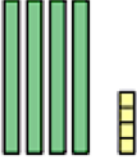

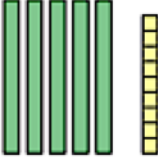





TWO-DIGIT NUMBERS

DIENES BLOCKS 1

Ref: G113. **1S2**





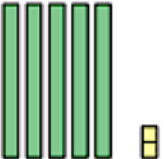
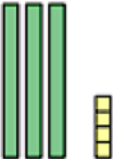




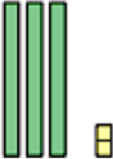

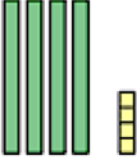

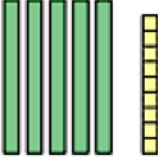

<p>A1 What number is shown by the Dienes Blocks?</p> 	<p>A2 What number is shown by the Dienes Blocks?</p> 	<p>A3 What number is shown by the Dienes Blocks?</p> 	<p>A4 What number is shown by the Dienes Blocks?</p> 
<p>B1 What number is shown by the Dienes Blocks?</p> 	<p>B2 What number is shown by the Dienes Blocks?</p> 	<p>B3 What number is shown by the Dienes Blocks?</p> 	<p>B4 What number is shown by the Dienes Blocks?</p> 
<p>C1 What number is shown by the Dienes Blocks?</p> 	<p>C2 What number is shown by the Dienes Blocks?</p> 	<p>C3 What number is shown by the Dienes Blocks?</p> 	<p>C4 What number is shown by the Dienes Blocks?</p> 
<p>D1 What number is shown by the Dienes Blocks?</p> 	<p>D2 What number is shown by the Dienes Blocks?</p> 	<p>D3 What number is shown by the Dienes Blocks?</p> 	<p>D4 What number is shown by the Dienes Blocks?</p> 



TWO-DIGIT NUMBERS

DIENES BLOCKS 1

Ref: G113. **1S2**

<p>A1 What number is shown by the Dienes Blocks?</p>  <p>3</p>	<p>A2 What number is shown by the Dienes Blocks?</p>  <p>40</p>	<p>A3 What number is shown by the Dienes Blocks?</p>  <p>14</p>	<p>A4 What number is shown by the Dienes Blocks?</p>  <p>25</p>
<p>B1 What number is shown by the Dienes Blocks?</p>  <p>52</p>	<p>B2 What number is shown by the Dienes Blocks?</p>  <p>34</p>	<p>B3 What number is shown by the Dienes Blocks?</p>  <p>6</p>	<p>B4 What number is shown by the Dienes Blocks?</p>  <p>41</p>
<p>C1 What number is shown by the Dienes Blocks?</p>  <p>60</p>	<p>C2 What number is shown by the Dienes Blocks?</p>  <p>23</p>	<p>C3 What number is shown by the Dienes Blocks?</p>  <p>32</p>	<p>C4 What number is shown by the Dienes Blocks?</p>  <p>16</p>
<p>D1 What number is shown by the Dienes Blocks?</p>  <p>44</p>	<p>D2 What number is shown by the Dienes Blocks?</p>  <p>5</p>	<p>D3 What number is shown by the Dienes Blocks?</p>  <p>59</p>	<p>D4 What number is shown by the Dienes Blocks?</p>  <p>90</p>