

£8.75
**LOOP CARDS**  
DIRECT PROPORTION  
[MONEY 4]

☆☆☆ **CARD A**


4 apples cost 88 pence

How much will 30 apples cost?

SET 1 ? 

Find Answer


www.maths4everyone.com


£7.50
**LOOP CARDS**  
DIRECT PROPORTION  
[MONEY 4]

☆☆☆ **CARD B**


9 bags of flour cost £9.90

How much will 7 bags of flour cost?

SET 1 ? 

Find Answer


www.maths4everyone.com


£6.40
**LOOP CARDS**  
DIRECT PROPORTION  
[MONEY 4]

☆☆☆ **CARD C**


10 loaves of bread cost £9

How much will 6 loaves of bread cost?

SET 1 ? 

Find Answer


www.maths4everyone.com


£7.70
**LOOP CARDS**  
DIRECT PROPORTION  
[MONEY 4]

☆☆☆ **CARD D**


2 pencils cost 36 pence

How much will 50 pencils cost?

SET 1 ? 

Find Answer


www.maths4everyone.com


£8.50
**LOOP CARDS**  
DIRECT PROPORTION  
[MONEY 4]

☆☆☆ **CARD E**


8 bottles of washing up liquid cost £12

How much will 5 bottles of washing up liquid cost?

SET 1 ? 

Find Answer


www.maths4everyone.com


£7.80
**LOOP CARDS**  
DIRECT PROPORTION  
[MONEY 4]

☆☆☆ **CARD F**

4 bottles of drink cost £3.60

How much will 9 bottles of drink cost?

SET 1 ? 

Find Answer

www.maths4everyone.com


£7
**LOOP CARDS**  
DIRECT PROPORTION  
[MONEY 4]

☆☆☆ **CARD G**


6 rulers cost £2.70

How much will 15 rulers cost?

SET 1 ? 

Find Answer


www.maths4everyone.com


£5.40
**LOOP CARDS**  
DIRECT PROPORTION  
[MONEY 4]

☆☆☆ **CARD H**


5 jars of coffee cost £9

How much will 4 jars of coffee cost?

SET 1 ? 

Find Answer


www.maths4everyone.com


£7.20
**LOOP CARDS**  
DIRECT PROPORTION  
[MONEY 4]

☆☆☆ **CARD I**

3 bags of sand cost £5.10

How much will 5 bags of sand cost?

SET 1 ? 

Find Answer


www.maths4everyone.com

➔ £6.60 **LOOP CARDS**  
DIRECT PROPORTION  
[MONEY 4]

☆☆☆ **CARD J**

4 tins of tuna cost £5.20

How much will 6 tins of tuna cost?

SET 1  Find Answer


www.maths4everyone.com

➔ £7.25 **LOOP CARDS**  
DIRECT PROPORTION  
[MONEY 4]

☆☆☆ **CARD K**

20 packets of Oreo biscuits cost £16

How much will 8 packets of Oreo biscuits cost?

SET 1  Find Answer


www.maths4everyone.com

➔ £8 **LOOP CARDS**  
DIRECT PROPORTION  
[MONEY 4]

☆☆☆ **CARD L**

3 bread rolls cost £1.05

How much will 25 bread rolls cost?

SET 1  Find Answer

www.maths4everyone.com

➔ £6.75 **LOOP CARDS**  
DIRECT PROPORTION  
[MONEY 4]

☆☆☆ **CARD M**

4 oranges cost £1.60

How much will 20 oranges cost?

SET 1  Find Answer


www.maths4everyone.com

➔ £6.30 **LOOP CARDS**  
DIRECT PROPORTION  
[MONEY 4]

☆☆☆ **CARD N**

3 rolls of Sellotape cost £4.20

How much will 5 rolls of Sellotape cost?

SET 1  Find Answer


www.maths4everyone.com

➔ £9 **LOOP CARDS**  
DIRECT PROPORTION  
[MONEY 4]

☆☆☆ **CARD O**

2 bags of sugar cost £1.40

How much will 9 bags of sugar cost?

SET 1  Find Answer


www.maths4everyone.com

➔ £8.10 **LOOP CARDS**  
DIRECT PROPORTION  
[MONEY 4]

☆☆☆ **CARD P**

2 notepads cost £2.90

How much will 5 notepads cost?

SET 1  Find Answer

www.maths4everyone.com

**LOOP CARD SOLUTION**  
DIRECT PROPORTION  
SET 1

www.maths4everyone.com

Ref: 050-1

**INSTRUCTIONS**

**SINGLE PLAYER**

- Shuffle the cards.
- Choose any card and work out the answer to its question.
- Put this card face down on the table.
- Look through the rest of the pack, find the card that has the answer from the first card and answer its question, putting this second card, face down, on top of the first card.
- Now find the card that has this answer on it and repeat the process of finding the answer to one card at the top of another card, answering the question etc., until you have answered all the questions on all of the cards.
- Use the Solution Card to check that you have put the cards in the correct order.
- Shuffle the cards and repeat the game, but try timing yourself!

**MULTIPLE PLAYERS**

- Each player has their own pack of shuffled cards.
- They start at the same time and sees who finished quickest.
- A 20 second time penalty is given for each card that does not correctly follow on from the previous one.

**VARIATION**

- Each player has a different pack of cards and race each other (the finish time for the players is recorded).
- Answers are checked and a 20 second time penalty is given for each card that does not correctly follow on from the previous one.
- Players then swap packs and race again.
- The player with the least total time wins.

www.maths4everyone.com