

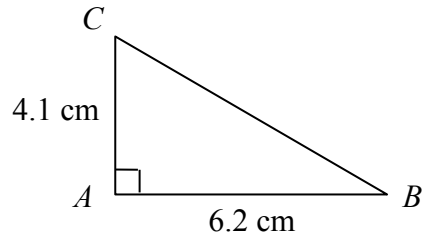


## PYTHAGORAS

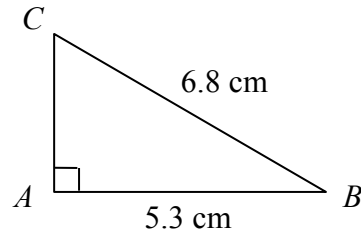
### MIXED QUESTIONS

Ref: G451. **1R1**

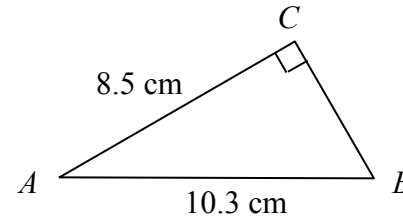
**A1** Find length  $BC$



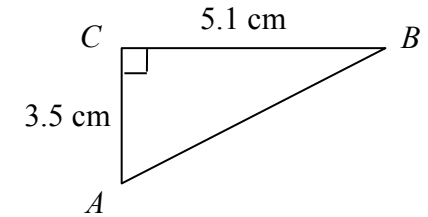
**A2** Find length  $AC$



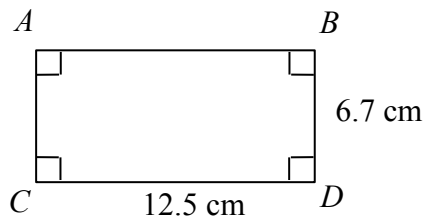
**A3** Find length  $BC$



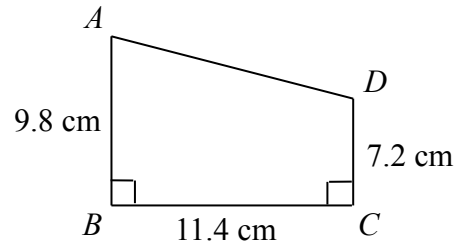
**A4** Find length  $AB$



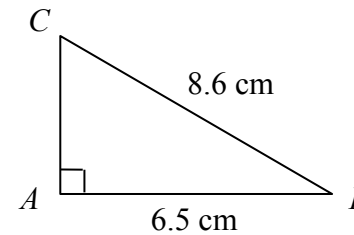
**B1** Find length  $BC$



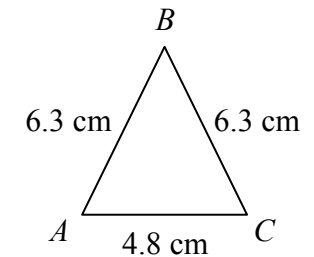
**B2** Find length  $AD$



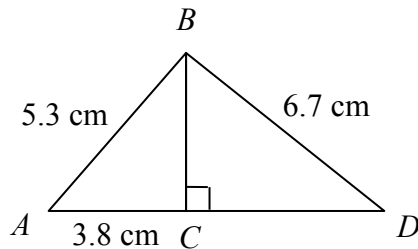
**B3** Find the area



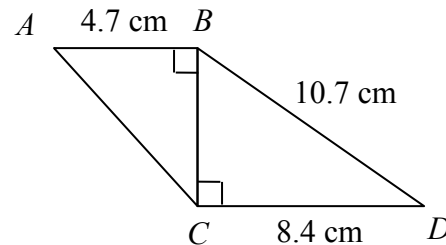
**B4** Find the area



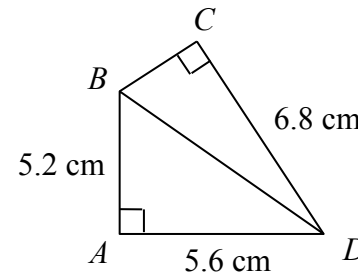
**C1** Find length  $CD$



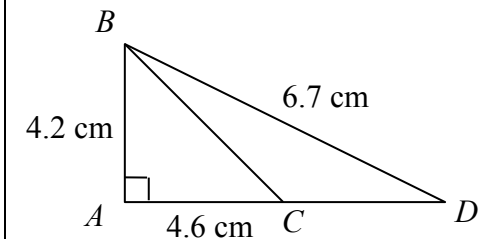
**C2** Find length  $AC$



**C3** Find length  $BC$



**C4** Find length  $CD$

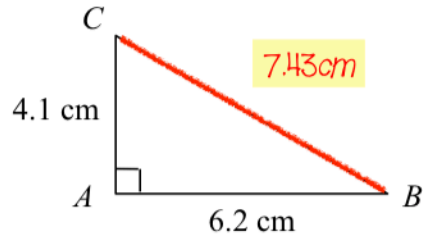




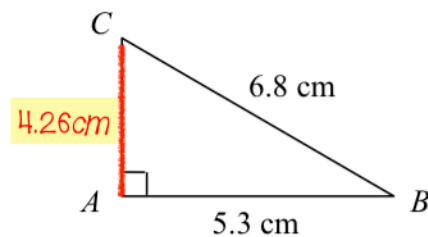
## PYTHAGORAS EXAM-TYPE QUESTIONS

Ref: G451. **1R1**

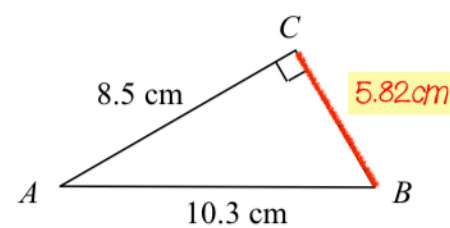
**A1** Find length  $BC$



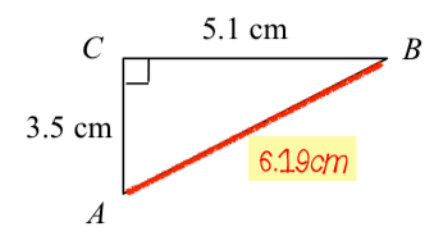
**A2** Find length  $AC$



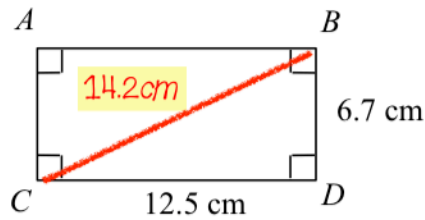
**A3** Find length  $BC$



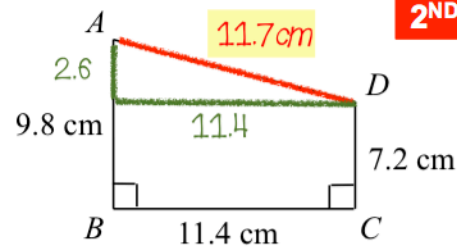
**A4** Find length  $AB$



**B1** Find length  $BC$



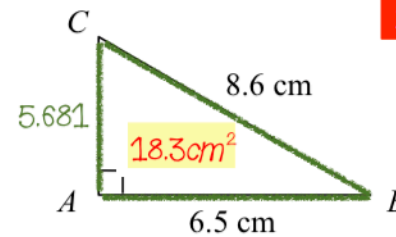
**B2** Find length  $AD$



1ST

2ND

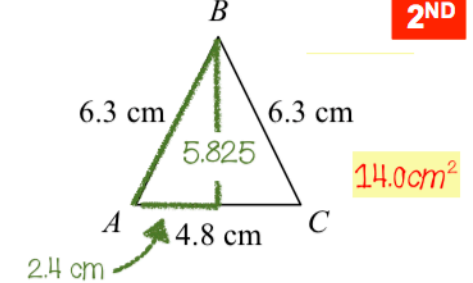
**B3** Find the area



1ST

2ND

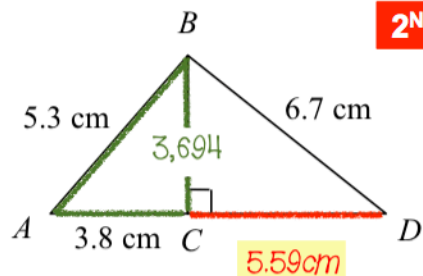
**B4** Find the area



1ST

2ND

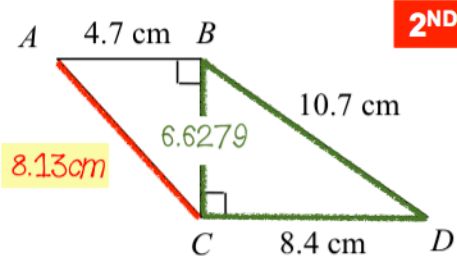
**C1** Find length  $CD$



1ST

2ND

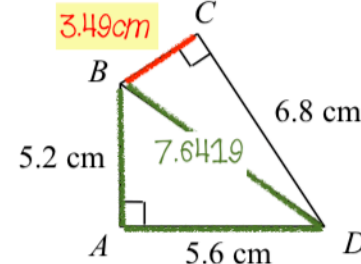
**C2** Find length  $AC$



1ST

2ND

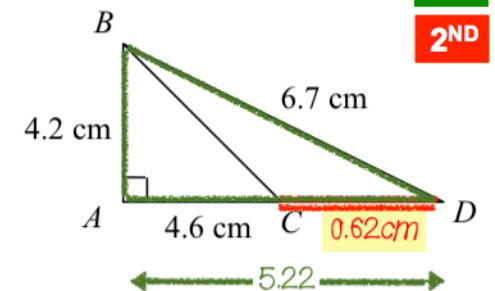
**C3** Find length  $BC$



1ST

2ND

**C4** Find length  $CD$



1ST

2ND